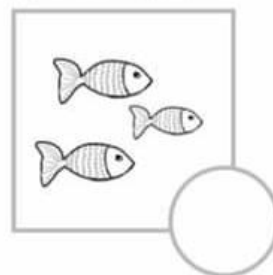
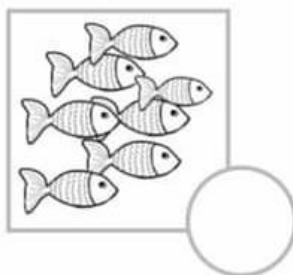
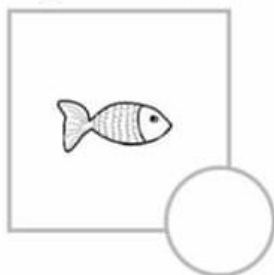
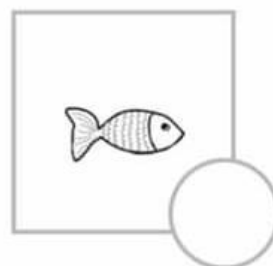
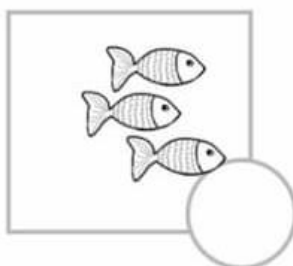
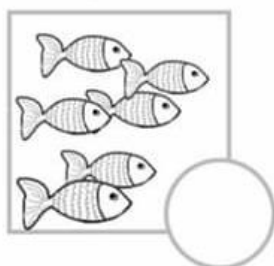




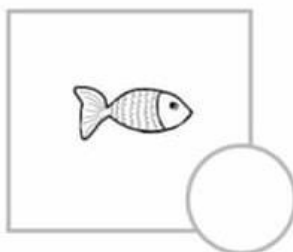
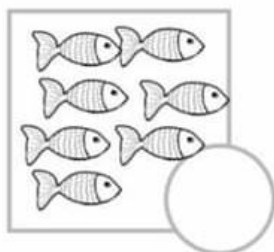
Segna con una X dove ci sono TANTI pesciolini.



Segna con una X dove ci sono POCHI pesciolini.



Segna con una X dove c'è UNO SOLO.

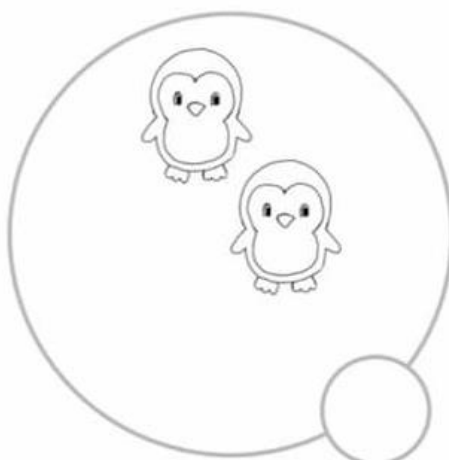


*Maestra Marinica*



# Di più o di meno?

Colora: di ROSSO il cerchietto dei più numerosi e di GIALLO quello dei meno numerosi.



SCRIVI IN NUMERO, LA SOMMA DEI PALLINI DI CIASCUNA COPPIA DI DADI

Name \_\_\_\_\_

Add.

$$\begin{array}{|c|} \hline \square \begin{array}{c} \bullet \\ \hline \end{array} + \square \begin{array}{c} \bullet \\ \hline \end{array} = \\ \hline \end{array}$$

$$\begin{array}{|c|} \hline \square \begin{array}{c} \bullet \bullet \\ \bullet \bullet \\ \hline \end{array} + \square \begin{array}{c} \bullet \\ \hline \end{array} = \\ \hline \end{array}$$

$$\begin{array}{|c|} \hline \square \begin{array}{c} \bullet \\ \bullet \\ \hline \end{array} + \square \begin{array}{c} \bullet \\ \hline \end{array} = \\ \hline \end{array}$$

$$\begin{array}{|c|} \hline \square \begin{array}{c} \bullet \\ \hline \end{array} + \square \begin{array}{c} \bullet \bullet \\ \bullet \bullet \\ \hline \end{array} = \\ \hline \end{array}$$

$$\begin{array}{|c|} \hline \square \begin{array}{c} \bullet \bullet \\ \bullet \\ \hline \end{array} + \square \begin{array}{c} \bullet \bullet \\ \bullet \\ \hline \end{array} = \\ \hline \end{array}$$

$$\begin{array}{|c|} \hline \square \begin{array}{c} \bullet \bullet \\ \bullet \\ \hline \end{array} + \square \begin{array}{c} \bullet \bullet \\ \bullet \\ \hline \end{array} = \\ \hline \end{array}$$



































































$$\begin{array}{|c|} \hline \square \begin{array}{c} \bullet \bullet \\ \bullet \\ \hline \end{array} + \square \begin{array}{c} \bullet \\ \hline \end{array} = \\ \hline \end{array}$$

$$\begin{array}{|c|} \hline \square \begin{array}{c} \bullet \\ \hline \end{array} + \square \begin{array}{c} \bullet \bullet \\ \bullet \\ \hline \end{array} = \\ \hline \end{array}$$

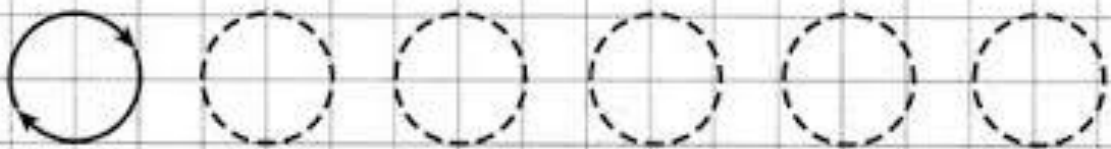
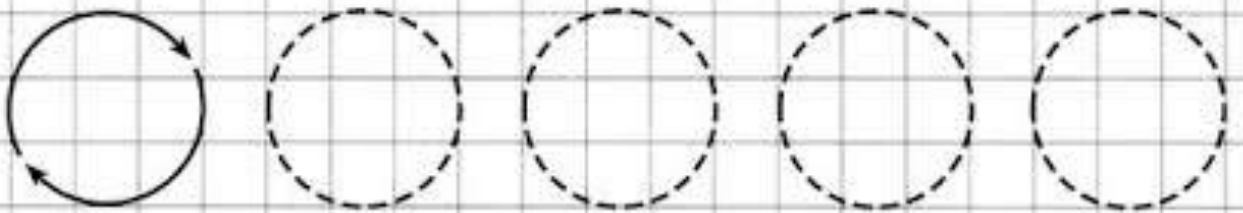
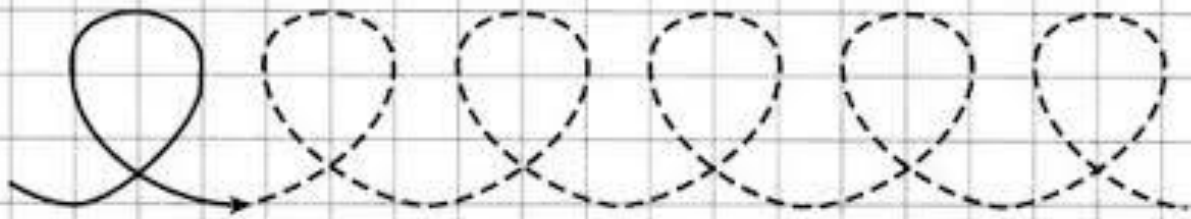
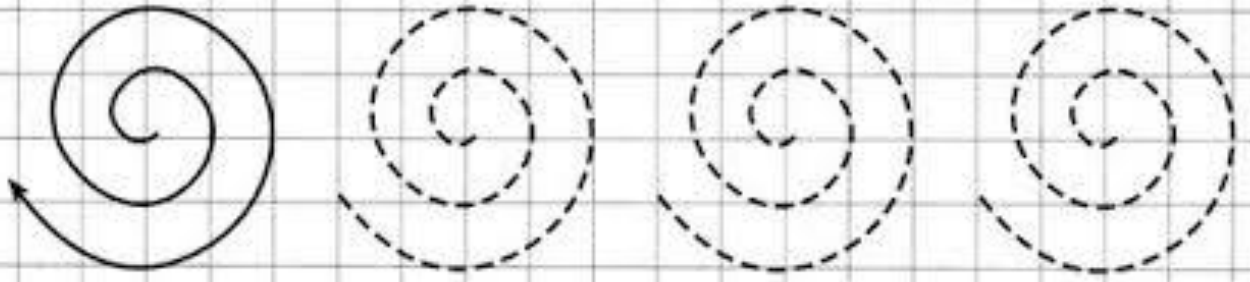
$$\begin{array}{|c|} \hline \square \begin{array}{c} \bullet \\ \hline \end{array} + \square \begin{array}{c} \bullet \bullet \\ \bullet \\ \hline \end{array} = \\ \hline \end{array}$$

$$\begin{array}{|c|} \hline \square \begin{array}{c} \bullet \bullet \\ \bullet \bullet \\ \hline \end{array} + \square \begin{array}{c} \bullet \\ \hline \end{array} = \\ \hline \end{array}$$

DISEGNA I PALLINI CHE MANCANO PER ARRIVARE AL NUMERO SCRITTO NEL RETTANGOLO

|   |  |  |
|---|--|--|
| 7       | 9        | 4        |
| 10      | 6        | 7        |
| 8       | 3        | 9        |
| 10      | 8        | 6        |
| 7     | 9      | 10     |
| 6   | 4    | 5    |
| 8   | 7    | 8    |
| 9   | 5    | 10   |
| 3   | 8    | 6    |
| 9   | 10   | 9    |
| 5   | 8    | 7    |

**Disegna qui sotto... 1 casetta, 2 alberi, 3 bambini che giocano nel prato, 4 fiori, 5 api che volano, 6 formichine, 7 uccellini, 8 coccinelle nel prato, 9 farfalle e 10 fili d'erba.....(il disegno lo puoi arricchire con tutti i particolari che vuoi).BUON DIVERTIMENTO!!!**



Completa i grafismi a spirale e circolari.

